





Name: _____

Dissonance

Identify each type of dissonance.




- a) polychord
- b) tone cluster
- c) suspension
- d) color tone
- e) upper extension



- a) polychord
- b) tone cluster
- c) suspension
- d) color tone
- e) upper extension



- a) polychord
- b) tone cluster
- c) suspension
- d) color tone
- e) upper extension



- a) polychord
- b) tone cluster
- c) suspension
- d) color tone
- e) upper extension